

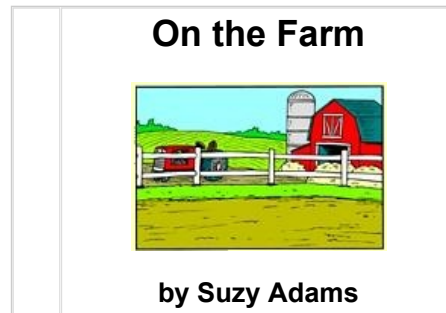
Kindergarten Worksheet Bundle

Sample printable worksheets from Edmentum's online, standards-based practice and assessment solution for grades K-12.




Study Island Kindergarten Reading - Parts of a Book

Question 1 .




Look at the cover of the book above. Then, click on the character that fits in the book.



Question 2 .

In which picture below does the arrow point to a book's pages?




Question 3 .

Click on the picture that tells what happened at the beginning of the story.

Today, was wet.

Then, it got cold.

The stars came out at night.




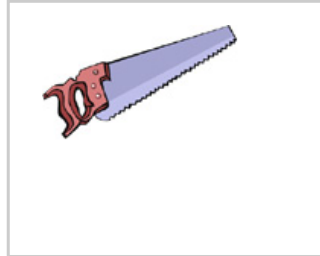
Question 4 .

Click on the picture of the item that is named **last** in the story below.

Dad got a saw.

Mom got a bell.

I got a book.



Question 5 .

Look at the story below. Click on the sentence that you should read **first** in the story.

I saw a bee.

It was on the lawn.

It sat on my foot.

It was on the lawn.

It sat on my foot.

I saw a bee.

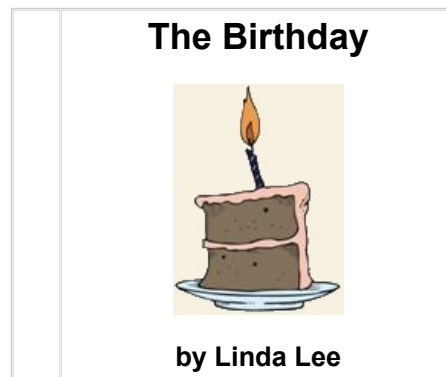
Question 6 .

Read the sentence below. Then, click on the animal that is named **first** in the sentence.

Jill has a frog and a fish.



Question 7 .



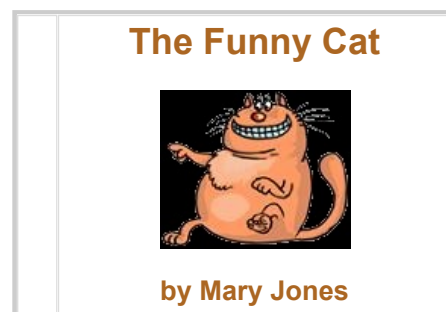
Look at the cover of the book above. Then, click on the box that shows the author of the book.

The Birthday



Linda Lee

Question 8 .



Which part of the book is placed at the top of this book cover?

the author

the title

Question 9 .



Click on the letter below that you read **last** when you read the word **GAME**.

G

E

A

Question 10 .




Look at the cover of the book above. Then, click on the page below that fits in the book.

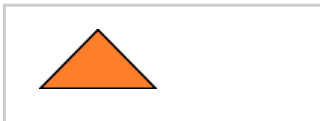


Study Island Kindergarten Geometry - Shapes


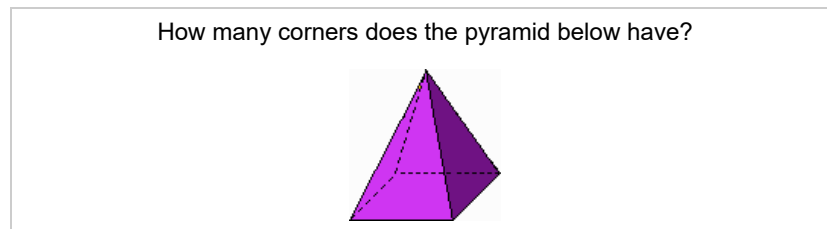
Question 1 .




Click on the part of the drawing that looks like a rectangle.




Question 2 .



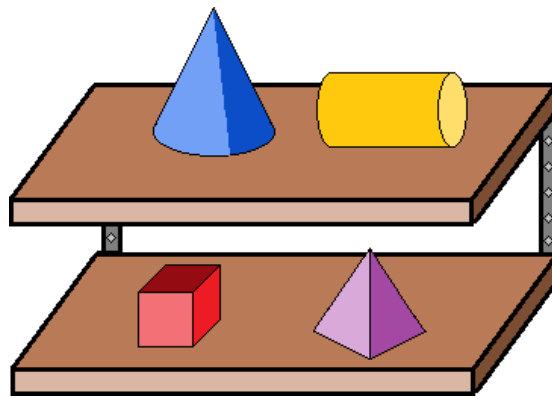
Question 3 .



Which shape is behind the triangle?



Question 4 .



Which shape is beside the cylinder?

cube

cone

pyramid

Question 5 .



Which shape is below the rectangle?

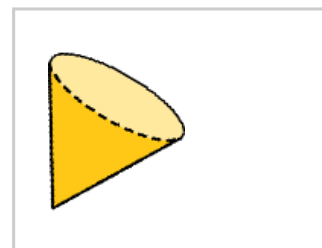
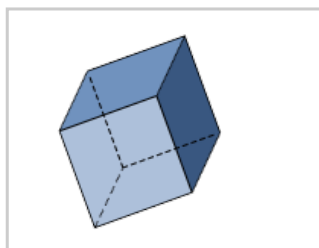
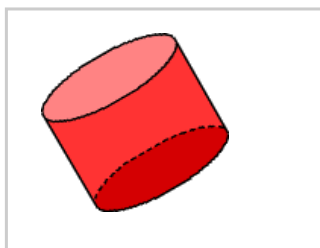
circle

triangle

square


Question 6 .

Which shape below is a cube?



Question 7 .

How many sides does a square have?






3

2

4

Question 8 .

Which shape below is a square?



Question 9 .



Click on the part of the picture that looks like a cube.



Question 10 .

Which of the shapes below is solid?

