

8th Grade Worksheet Bundle

Sample printable worksheets from Edmentum's online, standards-based practice and assessment solution for grades K-12.



Study Island 8th Grade Reading - Meaning and Tone

Question 1 .

When my mother died I was very young,
And my father sold me while yet my tongue
Could scarcely cry 'weep! 'weep! 'weep! 'weep!
So your chimneys I sweep, and in soot I sleep.
from "The Chimney Sweeper" by William Blake

What is the mood of the stanza?

- A. grim
- B. timid
- C. daring
- D. light

Question 2 .

Italian Girl: Hi, my name is Maria, and I'm new at this school. I just moved here from Italy.

American Girl: Hi, I'm Katie. Tell me something about your country. Do you and your friends like to eat pizza?

Italian Girl: Yes, we really like pizza, but we like many other things, too. My mom makes all kinds of pasta, like rigatoni, and cannelloni, and ravioli.

American Girl: Do you have big cities in your country?

Italian Girl: Oh, yes. We have many big cities. Rome is the capitol of Italy. Other big cities are Naples, Florence, and Sorrento.

American Girl: Well, I'm glad you're in the United States now. Let's go to my house and get a snack.

What mood is **best** reflected in this skit?

- A. welcoming
- B. troubled
- C. humorous
- D. argumentative

Question 3 .

My Baby Sister

by A. Gautam

Fresh like morning dew
On a new leaf that has just sprung
After the longest winter
She rests on the leaf of the blanket
—pink as her soft cheeks
And blossoms in her sleep
Unaware of the world that has turned
Upside down because of her
And only for her

The author's tone in this poem can be **best** described as

- A. confused.
- B. sentimental.
- C. humorous.
- D. apathetic.

Question 4 .

Mammals of the Ice Age

adapted from the National Park Service

During the last Ice Age, the oceans were 300 feet lower than today. The floor of the Bering Sea became a bridge of dry land connecting Russia with Alaska. The climate of this land bridge was extremely dry and windy. Snow could not accumulate into the piles needed to form large ice sheets. The Bering Land Bridge was mostly ice free during the last Ice Age! It became a natural travel corridor for a great diversity of life, creating a community unlike anything today. For these species, the Bering Land Bridge was not just a temporary bridge between continents, but also a permanent part of their world.

Ice Age mammals were probably something to reckon with, says National Park Service archeologist David Anderson. "They would've been pretty impressive," he says. There were saber tooth tigers, short faced bears, wolves, and bison. An extinct form of the species, *Bison Antiquitus*, roamed the southeastern lowlands. It was likely a primary source of food and raw materials for the region's first inhabitants.

Archaeologists have discovered other remains from Ice Age mammals in the United States. The skull of a *Bison Antiquitus* was found in Florida's Wacissa River. It had a projectile point broken off in its forehead. This was just about the clearest association possible between humans and the now-extinct animals of the era.

At Little Salt Springs, also in Florida, a giant land tortoise was discovered. Scientists think it may have been speared with a wooden stake. Butchering or other tooling marks on mammoth bones, as well as finished points, foreshafts, and other objects carved from green bone or ivory, have been found at several places in the state.

Remains of essentially modern animals have been recovered at a number of later early American sites. These remains are usually found in rock shelter settings like Dust Cave and the Stanfield-Worley bluff shelter in Alabama.

Directions: Select ALL the correct answers.

Read the sentence from the passage.

Ice Age mammals were probably something to reckon with, says National Park Service archeologist David Anderson.

Which **two** words **best** represent the tone of this sentence?

- fearful
- awesome
- depressing
- disturbing
- informative

Question 5 .

Half Full

A rainy day will go away.
A failing grade can soon be raised.
A nasty cut in time will shut.
A dire year will disappear.

What word below **best** describes the tone of this poem?

- A. powerful
- B. cynical
- C. melancholic
- D. optimistic

Question 6 .

Even the day had taken on an eerie feeling. The night before the game, a steady, cold rain fell in Fayetteville, Arkansas. An icy fog hovered over the stadium as the crowd awaited the arrival of President Richard Nixon, who would award a plaque symbolic of the National Championship to the winner.

What is the mood of this passage?

- A. comical but peaceful
- B. scary or frightening
- C. sad and depressing
- D. expectant yet solemn

Question 7 .



I place my groceries on the conveyor belt and make sure that I have grabbed everything on my shopping list. It's close to dinner time, and my stomach is already starting to growl. I cannot wait to prepare a quick meal of spaghetti and meatballs. I start tapping my feet. Can't this line move any faster?

I reach into my purse to grab my wallet, but surprisingly, my hand does not wrap around the familiar bulk. I dig frantically, but it's no use. My wallet is gone! I hastily tell the cashier my situation and hightail it out of there. Grabbing my cell phone, I call my credit card company to check the activity on it.

"Thank you for calling MasterCard. This is Cindy. How can I help you?"

"I can't find my wallet! Will you check the activity on my account, please?!"

"Yes, of course. Just give me a second while I run the request. Can I put you on hold please?"

"Do I have a choice?!" I mumble to the music on hold.

"Ma'am? Someone has just made a purchase at Peggy's Nail and Spa."

My mouth drops as the news sinks in. Nancy is the only person I know who goes there and the only person who has easy access to my purse!

I cannot BELIEVE the nerve of that woman! I give her a place to stay, let her borrow \$500, help her look for a job, and how does she thank me?! She steals my identity! I am going to make her PAY!!!

What is the mood of paragraph 1?

- A. impatient
- B. hopeful
- C. melancholic
- D. threatening

Question 8 .

The Boston Tea Party

The event that came to be known as the Boston Tea Party occurred on the night of December 6, 1773. The "party" began when a group of men from Boston disguised themselves as Native Americans and climbed aboard the British merchant ship *Dartmouth* in the Boston harbor. The group's aim was to destroy the ship's cargo of tea. The disguised Americans threw 342 chests of tea into the sea. As a result, the British suffered losses estimated between ten to eighteen thousand pounds. The Boston Tea Party began a series of protests that eventually began the American Revolution.

What is the tone of this passage?

- A. rebellious
- B. informational
- C. persuasive
- D. informal

Question 9 .

The room was hushed. All one could hear was the rhythmic breathing of the surgical team and the beeping machines. Beads of sweat formed on the surgeon's brow. He and his team were working diligently to remove the remains of a tumor. He kept his hands steady and carefully maneuvered his knife. One mistake could cost him his patient's life. He did not want to rupture a blood vessel. He did not want to slice a nerve.

What is the mood of the passage?

- A. cautious
- B. sinister
- C. threatening
- D. heart-breaking

Question 10 .

Directions: Select the correct text in the passage.

Which two phrases in the passage **best** convey an excited tone?

If I Could Go Back in Time

Human history is generally divided up into several different eras. Each of these ages is memorable because of its own unique characteristics. If I could go back in time, I would choose to go back to the Elizabethan era. This period, from 1558 to 1603, gets its name from England's Queen Elizabeth I. The Elizabethan era is known as the "Golden Age" of literature. To experience the plays and the poetry, as well as the people, the food, and the events of that period **would be awfully fascinating**.

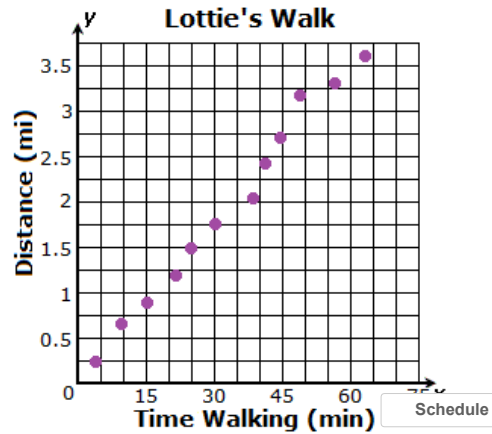
The Elizabethan era is considered an age where arts, like theatre and poetry, bloomed. The Globe Theatre was built during this time and it hosted plays written by William Shakespeare. It would be **a dream come true** for me to sit amongst the Elizabethan crowd and **watch Shakespeare's plays** like *Othello* or *Macbeth* performed for the very first time.

Another reason why I would like to go back to this period is to experience life under Queen Elizabeth's rule. She was a fair ruler who brought stability and prosperity to England. It was said that she knew several languages, including Latin, French, and Welsh. England saw great changes during her rule. She was a great supporter of art and literature. She also had a sense of style. Some of the gowns that she wore **were very beautiful**. I would love to dress myself in a similar outfit, but I don't think walking in them **would be a piece of cake**.

Study Island 8th Grade Math - Scatter Plots

Question 1 .

The scatter plot below shows the distances Lottie traveled on different morning walks.

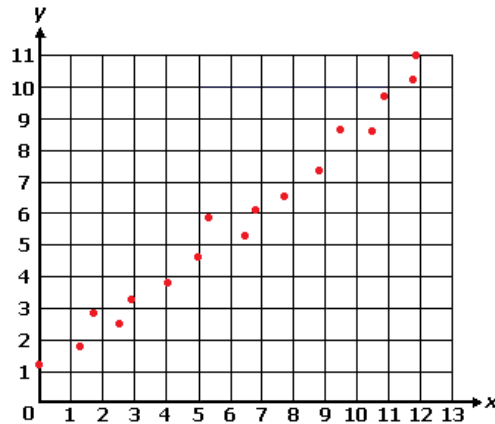


Which type of association best describes the relationship between the times Lottie walked and the distances she traveled?

- A. positive and negative association
- B. positive association
- C. negative association
- D. no association

Question 2 .

Which of the following best describes the relationship between the variables on the scatter plot below?

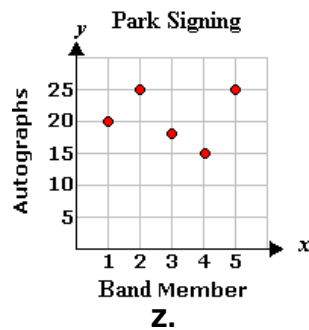
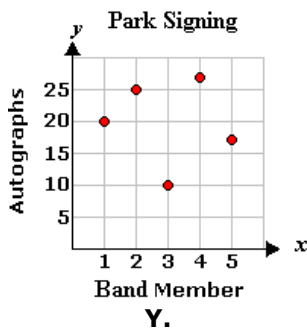
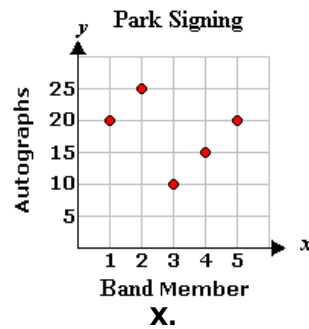
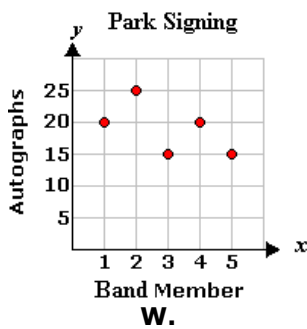


- A. nonlinear association
- B. linear and nonlinear association
- C. linear association
- D. no association

Question 3 .

Five members of a punk band were at the local skatepark, signing autographs. The table below shows the number of autographs signed by each band member during the first hour. Which scatter plot matches the table?

Band Member	Autographs
1	20
2	25
3	15
4	20
5	15

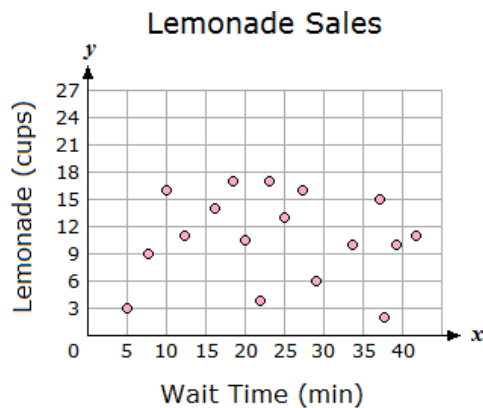


- A. W
- B. Z
- C. Y
- D. X

Question 4 .

At an amusement park, a lemonade stand was next to a roller coaster.

Throughout the day, people who got off the ride and purchased lemonade were asked how long they had to wait in line for the roller coaster. The results are shown in the scatter plot below.

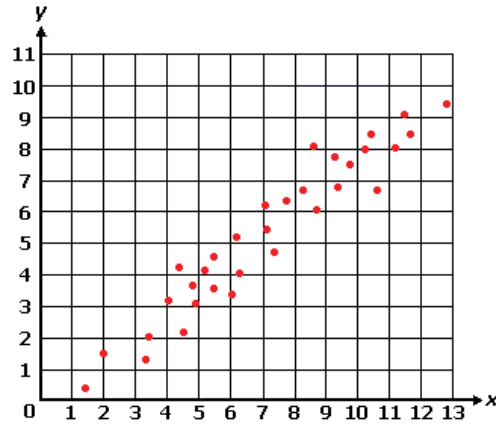


Which statement is supported by the data in the scatter plot?

- A.** As the wait time increases, the number of cups of lemonade sold tends to increase.
- B.** There is no relationship between the wait time and the number of cups of lemonade sold.
- C.** As the wait time increases, the number of cups of lemonade sold tends to stay the same.
- D.** As the wait time increases, the number of cups of lemonade sold tends to decrease.

Question 5 .

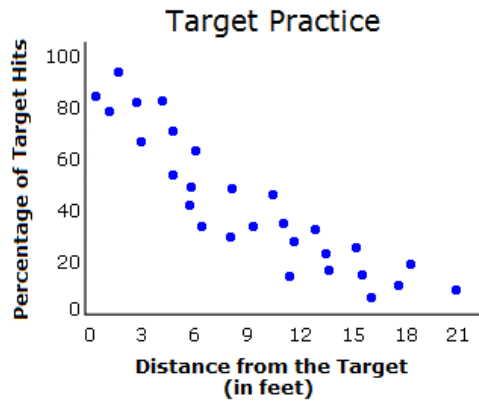
Which of the following best describes the relationship between the variables on the scatter plot below?



- A. non-linear association
- B. linear and non-linear association
- C. linear association
- D. no association

Question 6 .

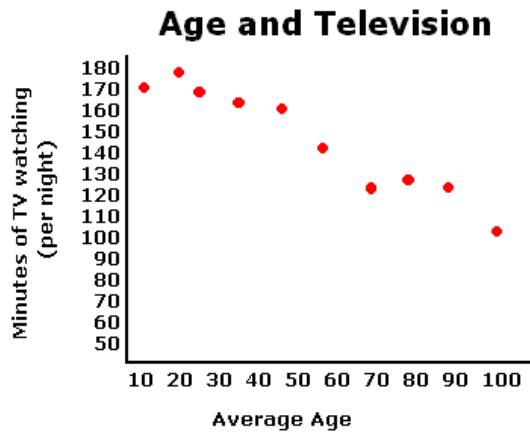
At a children's archery camp, the percentage of target hits at different distances from the target for several students were recorded. The data is shown in the scatter plot below.



Which of the following can be interpreted from this data?

- A. There is both a positive and a negative association between the distance from the target and the percentage of target hits.
- B. There is no association between the distance from the target and the percentage of target hits.
- C. There is a negative association between the distance from the target and the percentage of target hits.
- D. There is a positive association between the distance from the target and the percentage of target hits.

Question 7 .



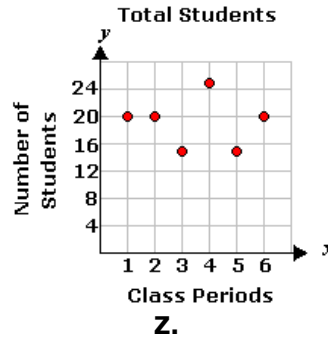
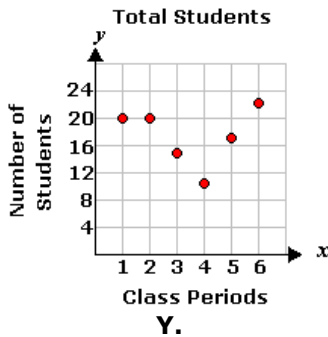
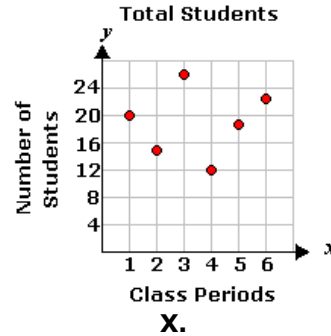
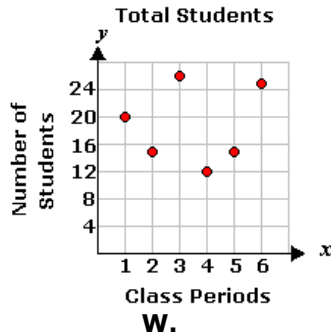
What can be concluded from the scatter plot above?

- A. The older a person gets, the less television he or she watches.
- B. There is no relationship between age and television watching.
- C. The older a person gets, the more television he or she watches.
- D. As a person gets older, their taste in television shows changes.

Question 8 .

Ashley counted the students in each of her classes on Friday. The table below shows the number she counted each period. Which scatter plot matches the table?

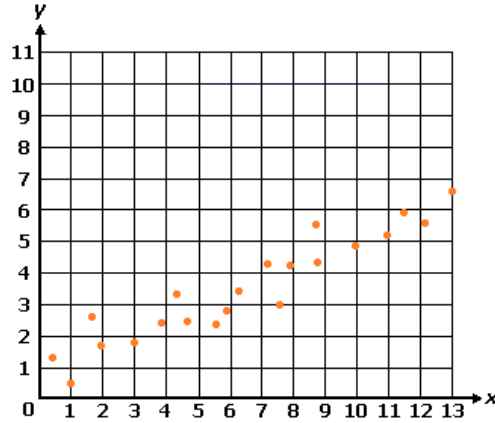
Class Periods	Number of Students
1	20
2	15
3	26
4	12
5	15
6	25



- A. W
- B. X
- C. Y
- D. Z

Question 9 .

Which of the following best describes the relationship between the variables on the scatter plot below?

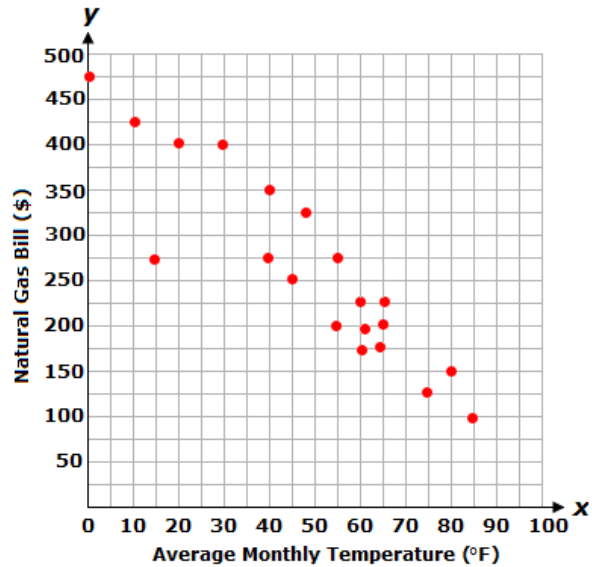


- A. positive association
- B. positive and negative association
- C. no association
- D. negative association

Question 10 .

Directions: Select the correct text in the table.

The scatter plot shows the average monthly temperature outside and the cost of the natural gas bill for a business over 20 months.



Decide whether the statement in each row is true or false.

There is a cluster around the point (60 , 200).	True	False
There is an outlier at the point (15 , 275).	True	False
The data shows a positive association between the average monthly temperature and the natural gas bill.	True	False
The scatter plot shows a non-linear association between the average monthly temperature and the natural gas bill.	True	False