



## 2nd Grade Worksheet Bundle

Sample printable worksheets from Edmentum's online, standards-based practice and assessment solution for grades K-12.



# Study Island 2nd Grade Writing - Linking Words

## Question 1 .

Wendy showed her sister how to do a forward roll. First, she bent down close to the ground. Next, Wendy put her head on the ground. \_\_\_\_\_, Wendy kicked her feet off the ground and pushed herself forward. Last, Wendy stood up. Her sister could not wait to try!

Which word or phrase best goes in the blank?

- A. Last
- B. Second
- C. To start
- D. Then

## Question 2 .

Anita decorated cupcakes for her birthday party. First, she spread pink icing on the cupcakes. \_\_\_\_\_, she put a purple jellybean on top of each cupcake. Finally, she put blue sprinkles on top. Each cupcake had Anita's favorite colors!

Which word or phrase best belongs in the blank?

- A. Last
- B. Third
- C. To start
- D. Next

## Question 3 .

Rudy had a cold. She followed her doctor's orders so that she would get well. First, she stayed home from school. \_\_\_\_\_, she took some medicine. Third, she drank a big glass of orange juice. Last, Rudy took a nap. When she woke up, Rudy was already feeling better!

Which word or phrase best belongs in the blank?

- A. To start
- B. Fourth
- C. Finally
- D. Second

## Question 4 .

1. The bugs don't seem very much alike.
2. The spiders spin webs. The ants collect food.
3. They both bite.

Choose the sentence that most likely comes next in the paragraph.

- A. Earlier, beetles have hard bodies.
- B. Indeed, ants hunt in groups.
- C. In addition, both are very strong bugs.
- D. Besides, spiders eat ants.

**Question 5 .**

1. You need to know a few things about fishing at Lewis Lake.
2. You should know there is only freshwater fish.
3. You are allowed to catch only 5 fish in a day.
4. The game warden will check to make sure you haven't caught more.
5. You need to know what to bring.
6. You must bring a fishing rod.
7. You should bring bait for the fish to eat.

Choose the word or phrase that **best** connects sentences one and two.

- A. Finally
- B. For example
- C. Before
- D. Second

**Question 6 .**

**Directions: Choose the correct answer from the drop-down menu.**

Which word correctly completes the sentence?

Some people in my class like to play baseball during recess. , I like playing basketball better.

**Question 7 .**

Ana Lucia helped her mom run some errands. First, they went to the book store. Next, they went to the sports store for new soccer balls. \_\_\_\_\_, Ana Lucia went with her mom to the grocery store. Finally, they went home to unload the car. Ana Lucia had a busy day!

Which word or phrase best belongs in the blank?

- A. Second
- B. After that
- C. To start
- D. Last

**Question 8 .**

Timmy wanted to draw a silly monster for his mom. First, he got a piece of paper and his crayons. Second, he drew a big purple circle. Third, he put six green eyes inside the circle. \_\_\_\_\_, he drew three arms and one leg with a blue crayon. Finally, he put a big open mouth on the monster with his gray crayon. He knew his mom would find this monster funny!

Which word or phrase best belongs in the blank?

- A. Last
- B. Before that
- C. To start
- D. Fourth

**Question 9 .**

My school had a fire drill yesterday. \_\_\_\_\_, the fire alarms started making noise. Then, my class lined up at the front of the room. Next, we followed our teacher outside. After that, the firefighters drove to the school to make sure everyone had left the building. Finally, we were allowed back into the school. I am glad there was not a real fire!

Which word best fits in the blank?

- A. First
- B. Last
- C. Second
- D. Fourth

**Question 10 .**

1. Cousin Mitch was a big man.
2. He used to play professional football.
3. He didn't stop there.
4. He retired and ran for mayor.
5. He became mayor.
6. He helped to get the hospital built.
7. This helped out many people.


Choose the word or words that **best** connect sentences one and two.

- A. For example
- B. Earlier
- C. Later
- D. However

# Study Island 2nd Grade Math - Fractional Parts

## Question 1 .

Each equal share of the rectangle below is one-half of the rectangle.

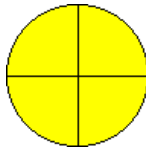


How many equal shares is the rectangle split into?

- A. 3
- B. 1
- C. 4
- D. 2

## Question 2 .

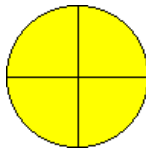
Each equal share of the circle below is one-fourth of the circle.



How many equal shares is the circle split into?

- A. 4
- B. 1
- C. 3
- D. 2

## Question 3 .

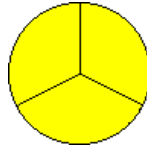


The circle above is cut into equal shares. Which of these describes the circle as a whole?

- A. three fourths
- B. four fourths
- C. three thirds
- D. two halves

**Question 4 .**

The circle below is cut into equal shares.



Which of these describes the circle as a whole?


- A. three-halves
- B. three-thirds
- C. four-fourths
- D. three-fourths

**Question 5 .**

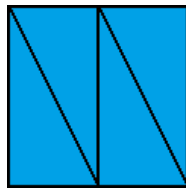
The square below has been divided into four equal shares.




Which picture shows the same square divided into four equal shares, but uses different shapes?



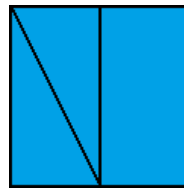
**W.**



**X.**



**Y.**



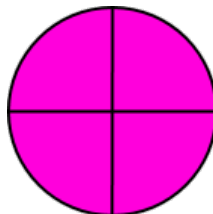
**Z.**

- A. W
- B. Y
- C. X
- D. Z

**Question 6 .**

**Directions: Select the correct answer from each drop-down menu.**

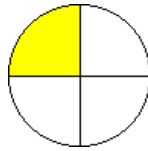
Look at this circle. Finish the sentences about the circle.



This circle is split into  equal shares. Each share is a  of the whole circle.

**Question 7 .**


The circle below is cut into equal shares.



Which of these describes each share of the circle?

- A. fourth
- B. two-halves
- C. third
- D. half


**Question 8 .**



The rectangle above is cut into equal shares. Which word describes each share of the rectangle?

- A. fourth
- B. third
- C. half

**Question 9 .**

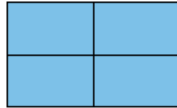


The cookie above is cut into equal shares. Which of these describes the cookie as a whole?

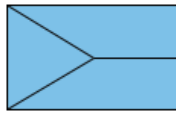
- A. three-halves
- B. two-halves
- C. two-thirds
- D. three-thirds

Question 10 .

The rectangle below has been divided into four equal shares.



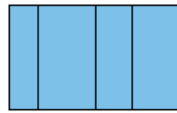
Which picture shows the same rectangle divided into four equal shares, but uses different shapes?



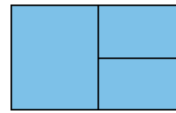
**W.**



**X.**



**Y.**



**Z.**

- A. W
- B. Z
- C. X
- D. Y