



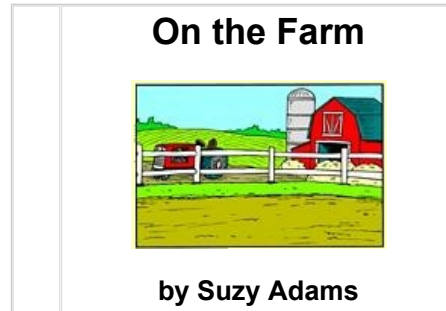
Kindergarten Worksheet Bundle

Sample printable worksheets from
Edmentum's online, standards-based practice
and assessment solution for grades K-12.




Study Island Kindergarten Reading - Parts of a Book

Question 1 .




Look at the cover of the book above. Then, click on the character that fits in the book.



Question 2 .

In which picture below does the arrow point to a book's pages?




Question 3 .

Click on the picture that tells what happened at the beginning of the story.

Today, was wet.

Then, it got cold.

The stars came out at night.



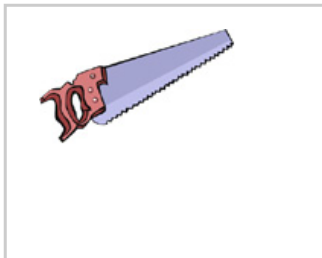
Question 4 .

Click on the picture of the item that is named **last** in the story below.

Dad got a saw.

Mom got a bell.

I got a book.



Question 5 .

Look at the story below. Click on the sentence that you should read **first** in the story.

I saw a bee.

It was on the lawn.

It sat on my foot.

It was on the lawn.

It sat on my foot.

I saw a bee.

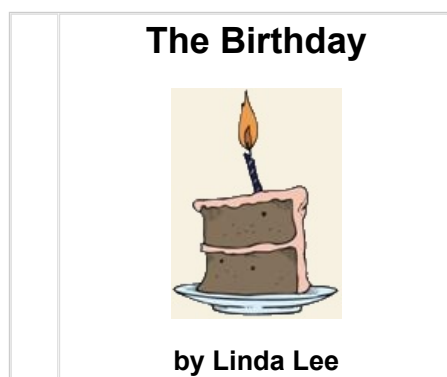
Question 6 .

Read the sentence below. Then, click on the animal that is named **first** in the sentence.

Jill has a frog and a fish.



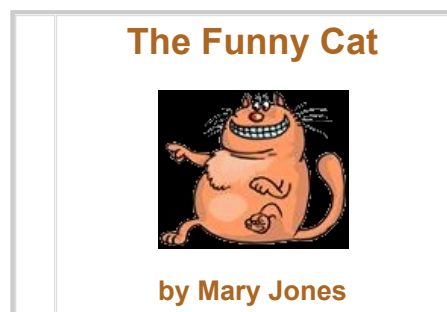
Question 7 .



Look at the cover of the book above. Then, click on the box that shows the author of the book.

The Birthday		Linda Lee
--------------	---	-----------

Question 8 .



Which part of the book is placed at the top of this book cover?

the author	the title
------------	-----------

Question 9 .



Click on the letter below that you read **last** when you read the word **GAME**.

G	E	A
---	---	---

Question 10 .




Look at the cover of the book above. Then, click on the page below that fits in the book.



Study Island Kindergarten Geometry - Shapes

Question 1 .

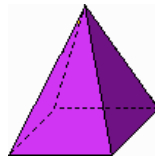


Click on the part of the drawing that looks like a rectangle.



Question 2 .

How many corners does the pyramid below have?




3

5

4

Question 3 .



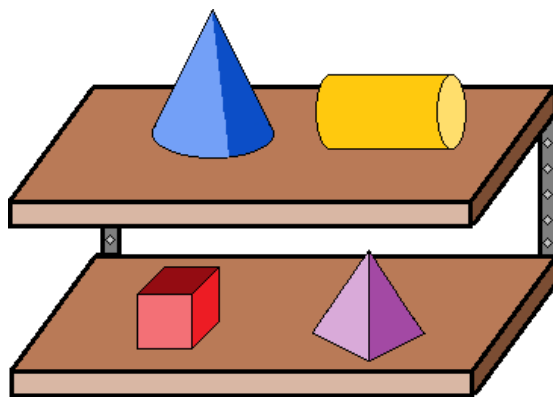
Which shape is behind the triangle?

square

circle

rectangle

Question 4 .



Which shape is beside the cylinder?

cube

cone

pyramid

Question 5 .



Which shape is below the rectangle?

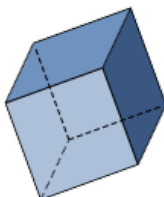
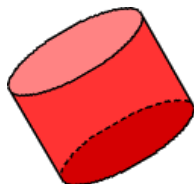
circle

triangle

square


Question 6 .

Which shape below is a cube?



Question 7 .

How many sides does a square have?






3

2

4

Question 8 .

Which shape below is a square?



Question 9 .


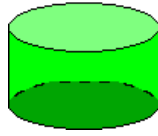



Click on the part of the picture that looks like a cube.



Question 10 .

Which of the shapes below is solid?



Answers: Reading - Parts of a Book

1. B
2. A
3. B
4. A
5. C
6. B
7. C
8. B
9. B
10. C

Explanations: Reading - Parts of a Book

1. Read the title of the book. The title of the book is **On the Farm**. One box shows a picture of a walrus, which lives in the ocean. The other box shows a picture of a pig, which lives on a farm. The pig is the right answer.
2. The cover is the outside of a book. Inside the cover are a book's pages. The correct answer points to the pages in a book, not the cover on the outside of the book.
3. We read stories from left to right and top to bottom. The **first** thing that happened in the story is that it was **wet**. The right answer is the picture that shows that the day was **wet**.
4. We read stories from left to right and top to bottom. The question asks you to choose the **last** thing named in the story. The last thing named in the story is a **book**.
5. We read stories from left to right and top to bottom. The **first** sentence of a story is where you should begin reading. The first sentence in the story is, **I saw a bee**. This is where you should start reading this story.
6. We read sentences from left to right. The question asks you to choose the animal that is named **first** in the sentence. The sentence names the **frog** first.
7. The author of a book is the person who wrote it. **Linda Lee** is the author of this book.
8. A title is the name of a book. The author is the person who wrote the book. **The Funny Cat** is the title of the book. It is at the top of the book cover.
9. We read words from left to right. The question asks you to choose the **last** letter you read in the word **GAME**. The last letter is an **E**.
10. Look at the title and picture on the book. The title of the book is **Humpty Dumpty**. The page that best fits in that book is the page that tells the story of Humpty Dumpty.

Answers: Geometry - Shapes

1. C
2. B
3. A
4. B
5. A
6. B
7. C
8. B
9. C
10. B

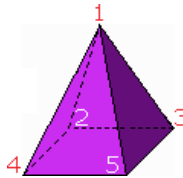
Explanations: Geometry - Shapes

1. A rectangle has 4 sides.

The door below has 4 sides. The door looks like a rectangle.



2. Start at the top of the pyramid and count the number of corners.



So, the pyramid shown has **5** corners.

3. Find the triangle in the picture. The pillow on the right looks like a triangle, because it has 3 sides.

The shape behind the triangle looks like a square, because it has 4 sides that are the same length.

So, the shape that is behind the triangle is a **square**.

4. Find the cylinder in the picture. The toy on top looks like a cylinder, because it has 2 round bases and a curved face.

The shape beside the cylinder looks like a cone, because it has 1 round base and a curved face that comes to a point.

So, the shape that is beside the cylinder is a **cone**.

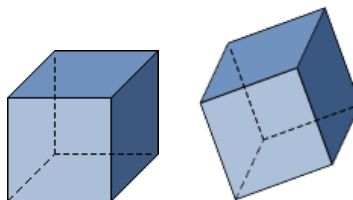
5. Find the rectangle in the picture. The door looks like a rectangle, because it has 4 sides.

The shape below the rectangle looks like a circle, because it is round.

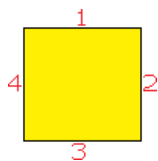
So, the shape below the rectangle is a **circle**.

6. A cube has 6 faces that are all squares. A cube can be turned and will look different, but it will still have 6 faces that are all squares.

The shapes below are cubes. Each shape has 6 faces that are squares.




7. Start at the top of the square and count the number of sides.



So, a square has **4** sides.

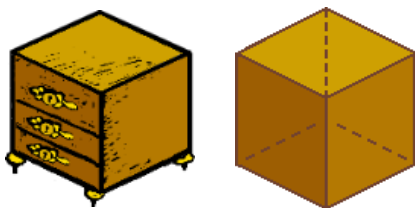
8. A square has 4 sides that are the same length. A square can be turned and will look different, but it will still have 4 sides that are the same length.

The shapes below are squares. Each shape has 4 sides that are the same length.



9. A cube has 6 faces that are all squares.

The table below has 6 faces that are all squares. The table below looks like a cube.



10. A solid shape is three-dimensional.

The shape below is solid.

