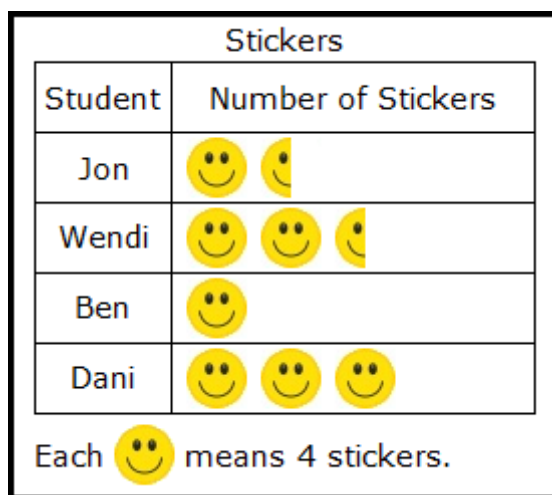


Pictographs

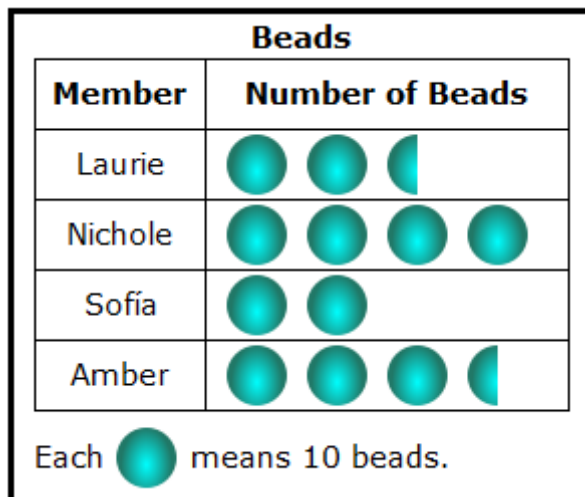
Directions: Read each pictograph and answer the questions that follow.



Answer the questions below about the number of stickers four students received from their teacher.

1. How many stickers did Wendi receive?
2. How many more stickers did Dani receive than Jon?
3. How many total stickers did Jon, Wendi, and Ben receive?
4. How many more stickers did Dani and Jon receive together than Wendi?
5. How many more stickers did Wendi receive than Ben and Jon together?

Pictographs

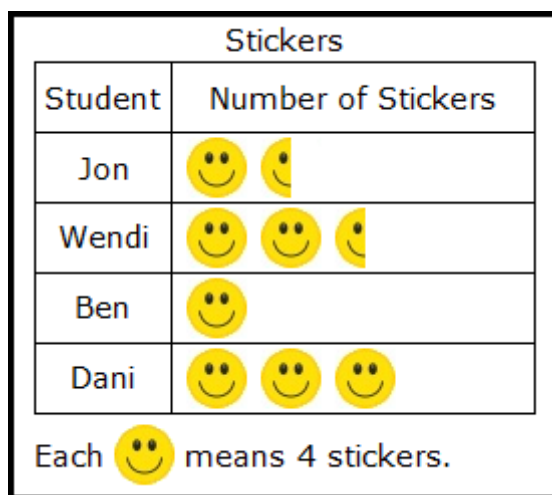


Answer the questions below about the number of beads four students used in art club.

6. How many total beads did Sofia and Amber use?
7. How many more beads did Nichole use than Laurie?
8. How many more beads did Amber, Nichole, and Laurie use than Sofia used?
9. How many total beads did Nichole and Sofia use together?
10. How many total beads did all four students use altogether?

Pictographs – Answer Key

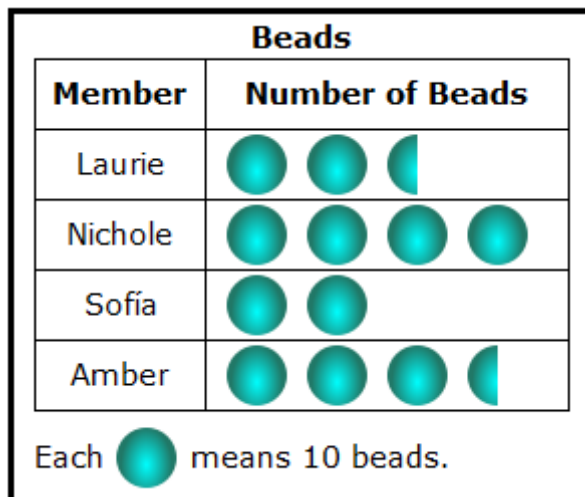
Directions: Read each pictograph and answer the questions that follow.



Answer the questions below about the number of stickers four students received from their teacher.

- How many stickers did Wendi receive? $4 + 4 + 2 = 10$ stickers
- How many more stickers did Dani receive than Jon? $12 - 6 = 6$ stickers
- How many total stickers did Jon, Wendi, and Ben receive? $6 + 10 + 4 = 20$ stickers
- How many more stickers did Dani and Jon receive together than Wendi?
 $18 - 10 = 8$ stickers
- How many more stickers did Dani receive than Ben and Jon together?
 $12 - (4 + 6) = 12 - 10 = 2$ stickers

Pictographs – Answer Key



Answer the questions below about the number of beads four students used in art club.

6. How many total beads did Sofia and Amber use? $20 + 35 = 55$ beads

7. How many more beads did Nichole use than Laurie? $40 - 25 = 15$ beads

8. How many more beads did Amber, Nichole, and Laurie use than Sofia used?

$(35 + 40 + 25) - 20 = 100 - 20 = 80$ beads

9. How many total beads did Nichole and Sofia use together? $40 + 20 = 60$ beads

10. How many total beads did all four students use altogether? $25 + 40 + 20 + 35 = 120$ beads